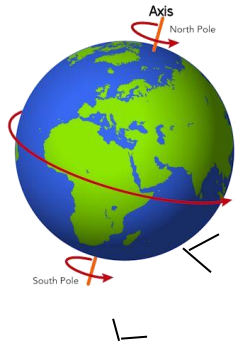


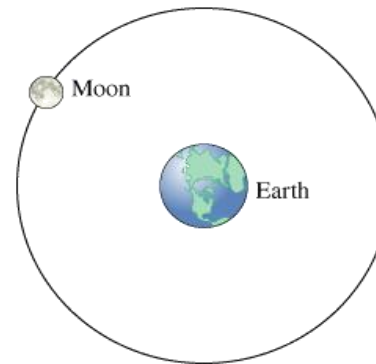
Name:

Earth's Movements

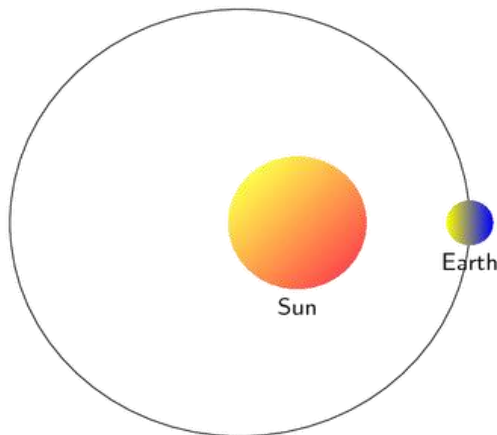
Important numbers to remember. Fill in the gaps.



1. Earth **spins \ rotates**
once every 24 hours.



3. The moon **orbits** the
Earth once every
28 days.



2. Earth **orbits** the
Sun once every
365 1/4 days.


4. The moon **rotates** once
every 28 days.




Day and Night



5. Draw the Sun and Earth and colour the Earth to show where it is **night time**.



It is night time when the Sun
is facing away from the Sun.



We get night and day because
Earth rotates. Not because
Earth orbits the Sun.